



# FICHAS PARA IMPRIMIR

Recursos Educativos y Fichas para Imprimir y Descargar



INICIAL



PRIMARIA



SECUNDARIA

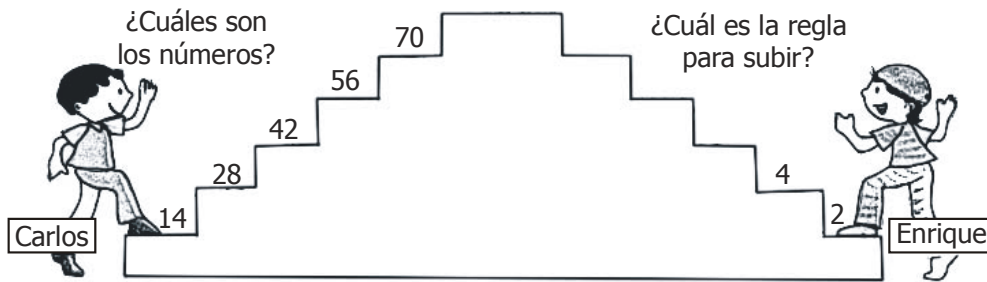


RAZ. MATEMATICO

TERCERO DE PRIMARIA

## Vamos Sube y Sube

Para subir la escalera Carlos y Enrique escriben números que se relacionan entre ellos.



**Observamos que:**

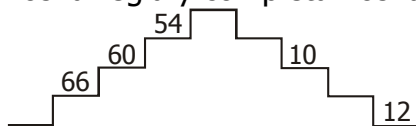
- Cuando Carlos escribe 14, Enrique escribe 2, porque divide entre 7.  
 $14 : 7 = 2$
- Cuando Carlos escribe 28, Enrique escribe 4, porque divide entre 7.  
 $28 : 7 = 4$

**Los números que faltan son:**

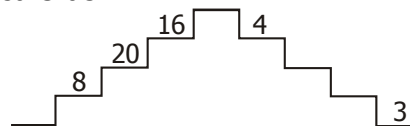
- al escalón 42 le corresponde 6, porque  
 $42 : 7 = 6$
- al escalón 56 le corresponde 8, porque  
 $56 : 7 = 8$
- al escalón 70 le corresponde 10, porque  
 $70 : 7 = 10$

Los números que faltan son 6; \_\_\_y \_\_\_. La regla para subir es dividir entre \_\_\_.

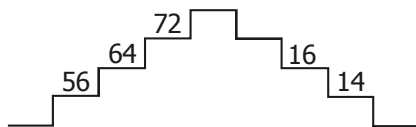
1. Descubrimos la regla y completamos las escaleras.



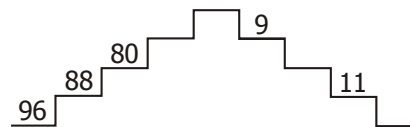
Regla: \_\_\_\_\_



Regla: \_\_\_\_\_



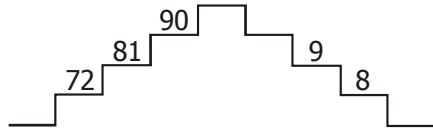
Regla: \_\_\_\_\_



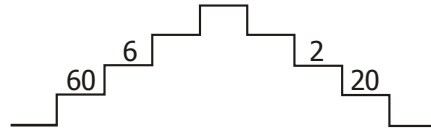
Regla: \_\_\_\_\_

**Ahora hazlo tú.**

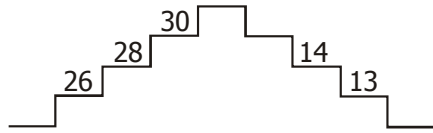
1. Descubre la regla y completa las escaleras.



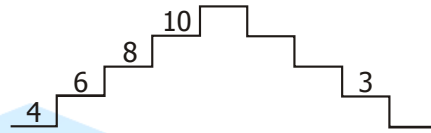
Regla: \_\_\_\_\_



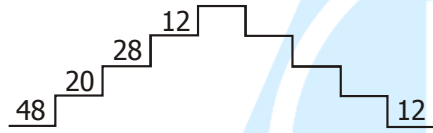
Regla: \_\_\_\_\_



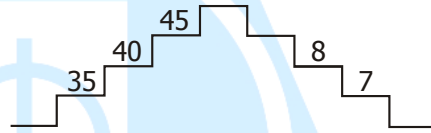
Regla: \_\_\_\_\_



Regla: \_\_\_\_\_



Regla: \_\_\_\_\_



Regla: \_\_\_\_\_

2. Completa los cuadros mágicos y luego calculamos las operaciones.

a)

29	a	15
22	36	c
57	b	43

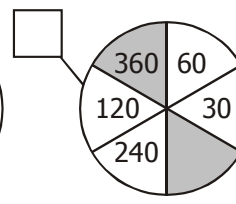
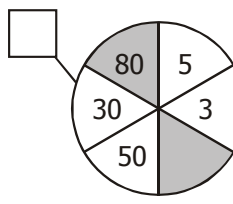
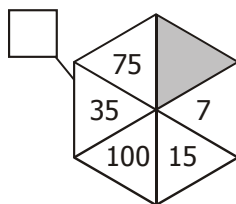
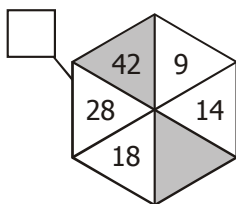
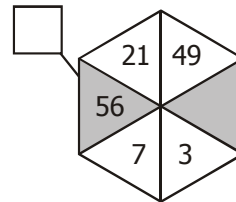
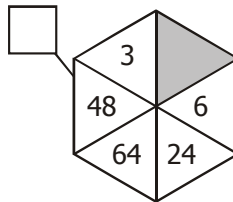
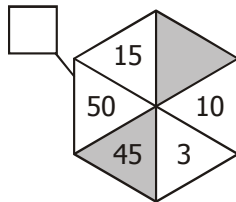
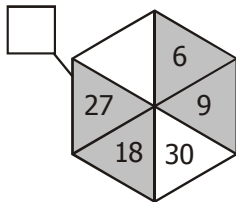
$a : b + c =$  \_\_\_\_\_

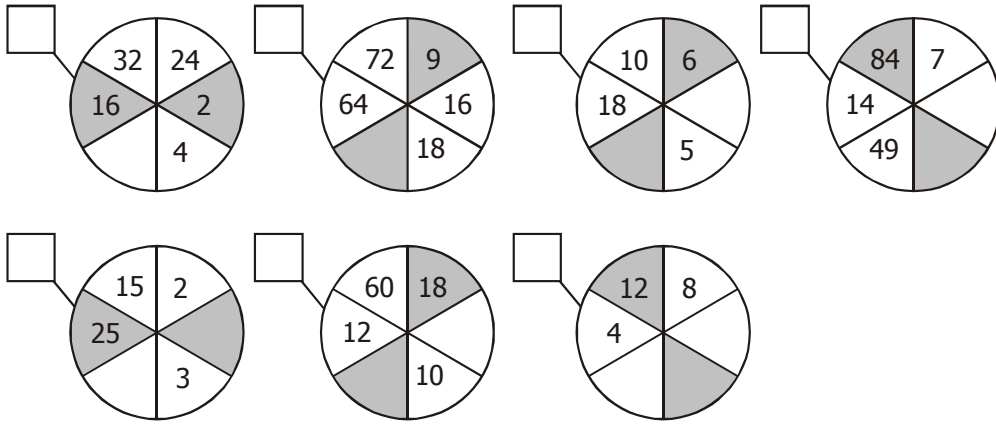
b)

16	36	n
12	20	28
m	4	r

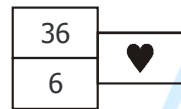
$r - m : n =$  \_\_\_\_\_

c) Completa el número que falta.

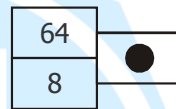




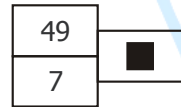
d) Completa y descubre el valor de los símbolos:



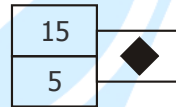
♥: \_\_\_\_\_



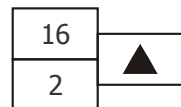
●: \_\_\_\_\_



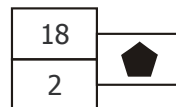
■: \_\_\_\_\_



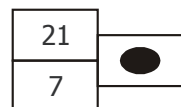
◆: \_\_\_\_\_



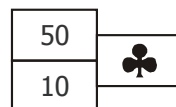
▲: \_\_\_\_\_



⬠: \_\_\_\_\_



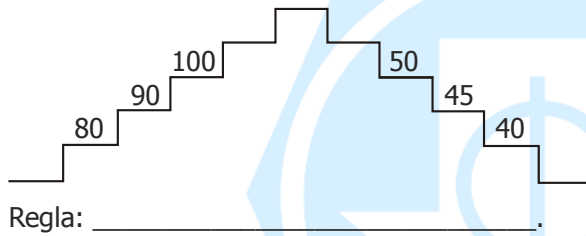
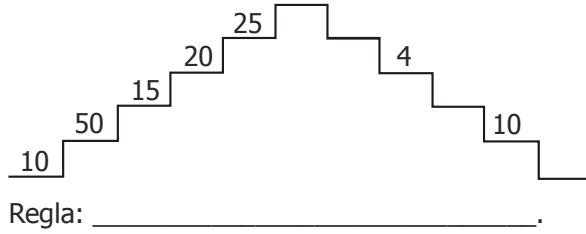
●: \_\_\_\_\_



♣: \_\_\_\_\_

# Retos para el hogar

1. Descubre la regla y completa los escalones.



2. Completa el número que falta.

