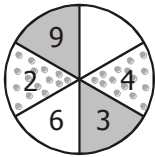


Distribucion Matematica

¡Qué rico pastel!



Ayúdame a encontrar el número que falta al pastel.



- * Observa que cada pedazo se relaciona con su opuesto:
 $2 \times 2 = 4$; $3 \times \boxed{3} = 9$ y $6 \times \boxed{6} = \underline{\hspace{2cm}}$
- * Entonces el número que falta es: .

Ahora hazlo tú:

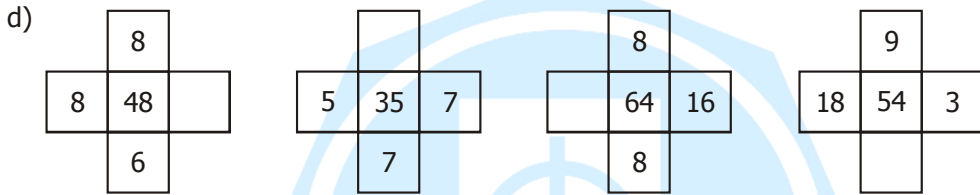
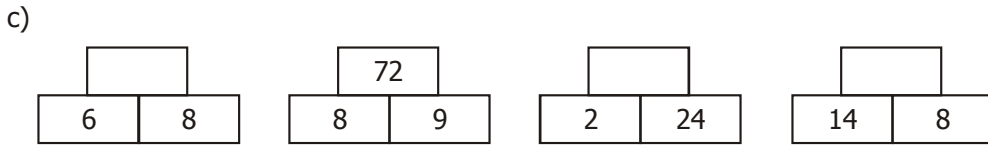
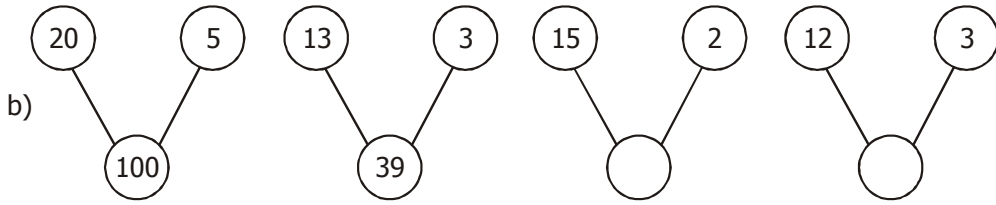
1. Completa los números que faltan:

a) Por <u> </u>	b) Por <u> </u>	c) Por <u> </u>
d) Por <u> </u>	e) Por <u> </u>	f) Por <u> </u>

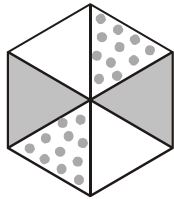
2. Observa y completa los números que faltan:

a)

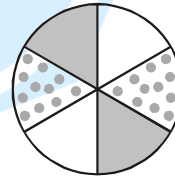
--	--	--	--



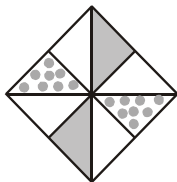
3. Demuestra a tu creatividad, inventa tres ejercicios y resuélvelos.



Por _____



Por _____

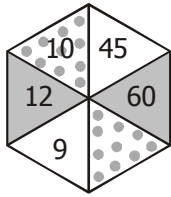


Por _____

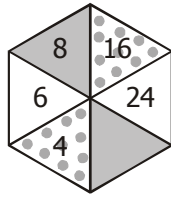


Retos para el hogar

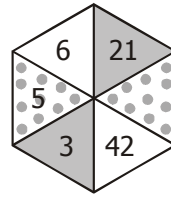
1. Completa los números que faltan.



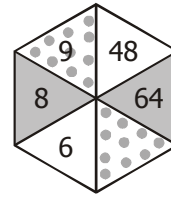
Por _____



Por _____

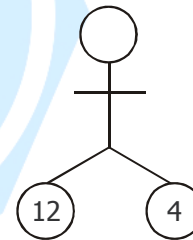
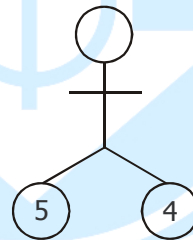
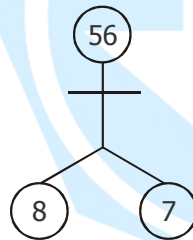
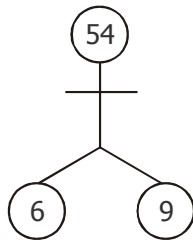
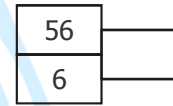
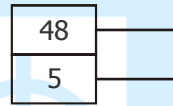
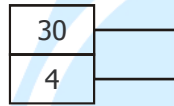
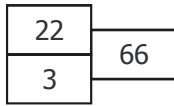


Por _____

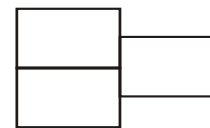
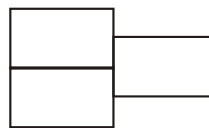
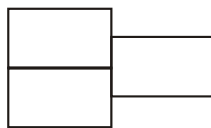
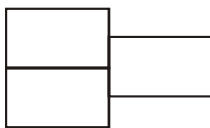
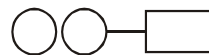


Por _____

2. Halla los números que faltan.

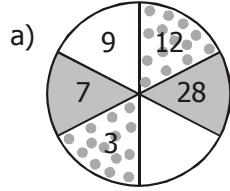


3. Demuestra tu creatividad inventando dos ejemplos parecidos al ejercicio n°2.

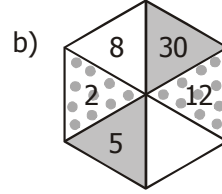


¿Cuánto aprendí?

1. Completo los números que faltan.

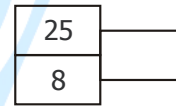
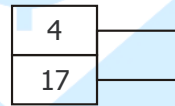
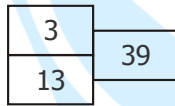
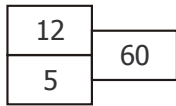


Por _____



Por _____

2. Hallo los valores escondidos.



3. Demuestra tu creatividad, inventa ejercicios y resuélvelos.

