





Multiplicando con la Tabla del 3

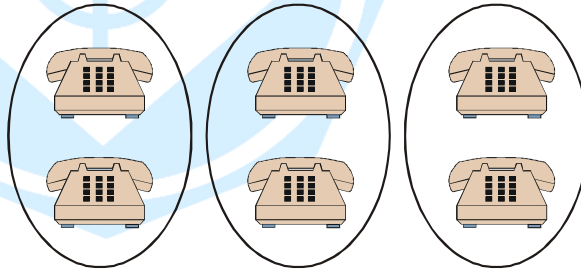
Cuenta los objetos de cada grupo y completa.



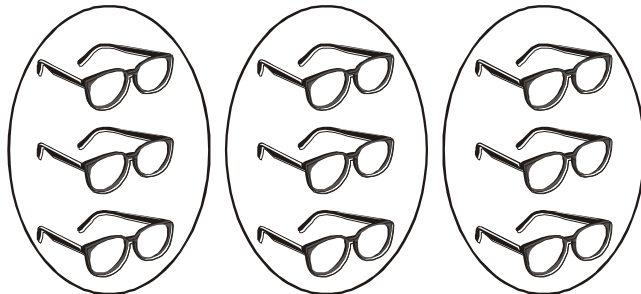
_____ veces _____ es _____
 _____ × _____ = _____



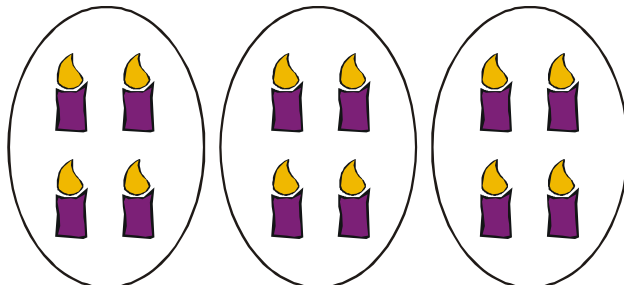
_____ veces _____ es _____
 _____ × _____ = _____



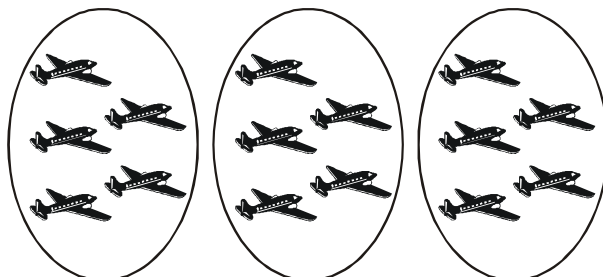
_____ veces _____ es _____
 _____ × _____ = _____



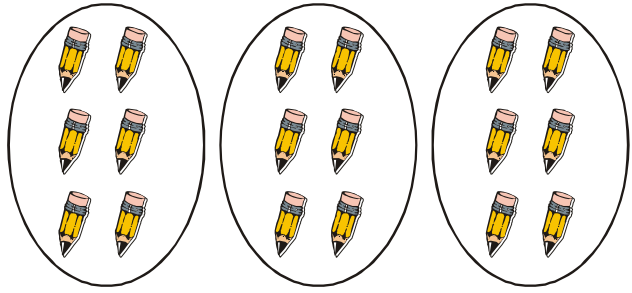
_____ veces _____ es _____
 _____ × _____ = _____



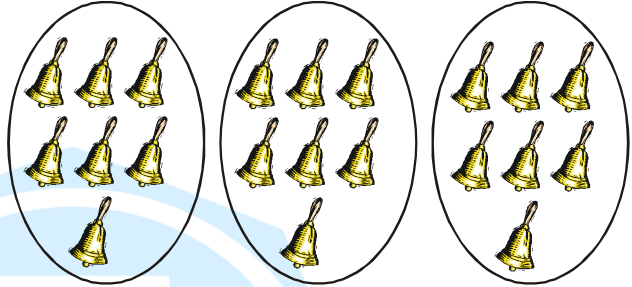
_____ veces _____ es _____
 _____ × _____ = _____



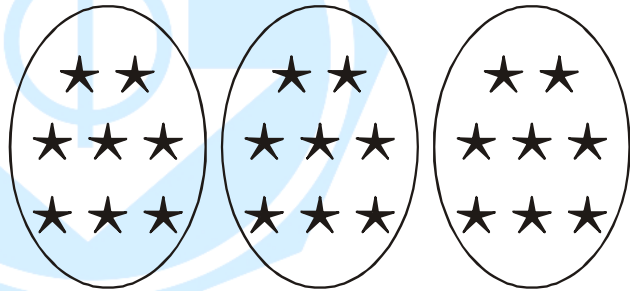
_____ veces _____ es _____
 _____ × _____ = _____



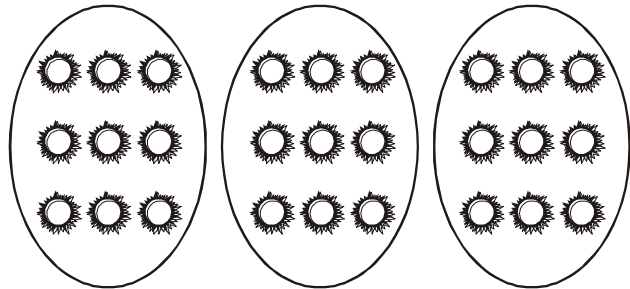
_____ veces _____ es _____
 _____ × _____ = _____




_____ veces _____ es _____
 _____ × _____ = _____



_____ veces _____ es _____
 _____ × _____ = _____



_____ veces _____ es _____
 _____ × _____ = _____



Multiplicación

* Realiza las siguientes multiplicaciones:

$$\begin{array}{r} 3 \times \\ \underline{2} \end{array}$$

$$\begin{array}{r} 6 \times \\ \underline{1} \end{array}$$

$$\begin{array}{r} 4 \times \\ \underline{0} \end{array}$$

$$\begin{array}{r} 5 \times \\ \underline{2} \end{array}$$

$$\begin{array}{r} 1 \times \\ \underline{2} \end{array}$$

$$\begin{array}{r} 7 \times \\ \underline{1} \end{array}$$

$$\begin{array}{r} 2 \times \\ \underline{2} \end{array}$$

$$\begin{array}{r} 3 \times \\ \underline{0} \end{array}$$

$$\begin{array}{r} 7 \times \\ \underline{2} \end{array}$$

$$\begin{array}{r} 5 \times \\ \underline{1} \end{array}$$

$$\begin{array}{r} 9 \times \\ \underline{2} \end{array}$$

$$\begin{array}{r} 3 \times \\ \underline{1} \end{array}$$

$$\begin{array}{r} 7 \times \\ \underline{0} \end{array}$$

$$\begin{array}{r} 6 \times \\ \underline{2} \end{array}$$

$$\begin{array}{r} 3 \times \\ \underline{5} \end{array}$$

$$\begin{array}{r} 8 \times \\ \underline{0} \end{array}$$

$$\begin{array}{r} 8 \times \\ \underline{2} \end{array}$$

$$\begin{array}{r} 3 \times \\ \underline{3} \end{array}$$

$$\begin{array}{r} 4 \times \\ \underline{3} \end{array}$$

$$\begin{array}{r} 8 \times \\ \underline{3} \end{array}$$

¡Qué fácil, yo lo lograré!

