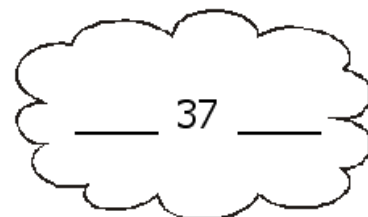

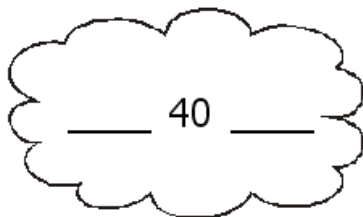
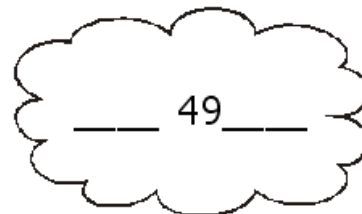
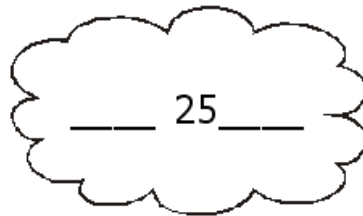
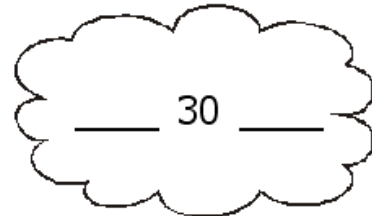
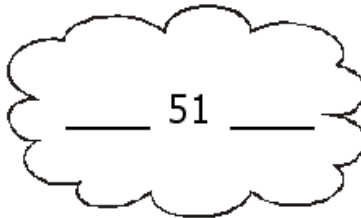
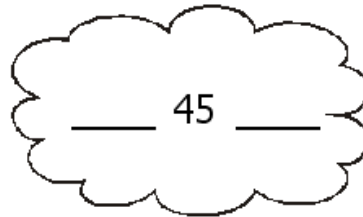
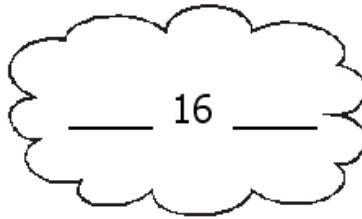
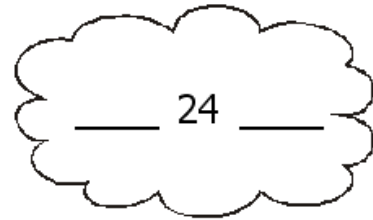
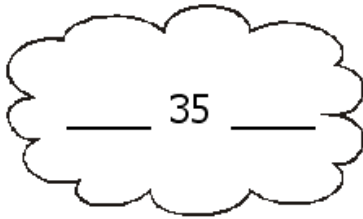




## Anterior y Posterior

\* Escribe el anterior y posterior de cada uno de los siguientes números.



# ¿Quién va antes y quién va despues?

\* Escribe el anterior y posterior de los siguientes números.

- |                  |                  |
|------------------|------------------|
| • _____ 59 _____ | • _____ 50 _____ |
| • _____ 44 _____ | • _____ 29 _____ |
| • _____ 26 _____ | • _____ 36 _____ |
| • _____ 33 _____ | • _____ 43 _____ |
| • _____ 49 _____ | • _____ 26 _____ |
| • _____ 18 _____ | • _____ 55 _____ |
| • _____ 28 _____ | • _____ 87 _____ |
| • _____ 46 _____ | • _____ 98 _____ |
| • _____ 52 _____ | • _____ 83 _____ |
| • _____ 71 _____ | • _____ 72 _____ |